

Objectives:

- Students will divide positive integers from the multiplication table without remainders, as evidenced by them passing one-minute quizzes.
- Students will graphically represent base-10 fractions, as evidenced by them completing a warm-up worksheet where they do so.
- Students will add base-10 fractions, as evidenced by them completing a warm-up worksheet where they do so.
- Students will write base-10 fractions in expanded form, and then as decimals, as evidenced by them completing a homework assignment where they do so.

Student Materials on Desk Corner:

- Homework #3-1
- Homework Checker
- Warm-up & Notes Checker

Student Materials for Class:

- Homework Log
- Binder Paper
- Pencils

Teacher Materials:

- “Minute Quiz 3-2” for each student
- “Warm-up 3-2” for each student
- “Unit Calendar” transparency
- “Homework #3-2” handout for each student

Homework:

- Finish Homework #3-2
- Continue 1 hour of ALEKS

Time	Activity
10 min	<p style="text-align: center;">MINUTE QUIZ, WARM-UP, AND ATTENDANCE</p> <p>Minute Quiz and Warm-up When the bell rings, quickly go around and put the minute quiz on each student’s desk, face down. Then, start everyone on the quiz at the same time and give everyone one minute. While students are working on the quiz, pass out the warm-ups so that students can work on them once they’re done with the minute quiz. After the minute is over, have a student collect the minute quizzes and give them to the teacher’s aide (TA) to grade.</p> <p>Attendance, Collect HW, and Warm-up Check While students work on the warm-up, take attendance and have the TA collect homework & stamp homework checkers. At the end of the allotted time, go around and stamp the students’ warm-up & notes checkers.</p>
30 min	<p style="text-align: center;">LESSON</p> <p>Put up the unit calendar transparency and show students where they are in the unit. Then, teach the lesson using the notes. Once students are finished, stamp their warm-up & notes checkers.</p>
10 min	<p style="text-align: center;">CLASSWORK</p> <p>Give students the homework assignment as their classwork. They must do problems 1, 5, 8 before they may work on ALEKS.</p>
30 min	<p style="text-align: center;">ALEKS</p> <p>When students finish their classwork, they should continue with ALEKS. Use this student work time to return graded homework.</p>

Solve the following division problems. You have exactly one minute!

$48 \div 8 =$

$35 \div 7 =$

$54 \div 9 =$

$48 \div 12 =$

$33 \div 11 =$

$10 \div 2 =$

$55 \div 11 =$

$8 \div 2 =$

$30 \div 6 =$

$18 \div 3 =$

$5 \div 1 =$

$15 \div 5 =$

Solve the following division problems. You have exactly one minute!

$48 \div 8 =$

$35 \div 7 =$

$54 \div 9 =$

$48 \div 12 =$

$33 \div 11 =$

$10 \div 2 =$

$55 \div 11 =$

$8 \div 2 =$

$30 \div 6 =$

$18 \div 3 =$

$5 \div 1 =$

$15 \div 5 =$

Solve the following division problems. You have exactly one minute!

$48 \div 8 =$

$35 \div 7 =$

$54 \div 9 =$

$48 \div 12 =$

$33 \div 11 =$

$10 \div 2 =$

$55 \div 11 =$

$8 \div 2 =$

$30 \div 6 =$

$18 \div 3 =$

$5 \div 1 =$

$15 \div 5 =$

Solve the following division problems. You have exactly one minute!

$4 \div 2 =$

$16 \div 4 =$

$8 \div 4 =$

$10 \div 10 =$

$6 \div 6 =$

$10 \div 10 =$

$36 \div 6 =$

$3 \div 1 =$

$18 \div 9 =$

$36 \div 6 =$

$9 \div 9 =$

$7 \div 7 =$

Solve the following division problems. You have exactly one minute!

$4 \div 2 =$

$16 \div 4 =$

$8 \div 4 =$

$10 \div 10 =$

$6 \div 6 =$

$10 \div 10 =$

$36 \div 6 =$

$3 \div 1 =$

$18 \div 9 =$

$36 \div 6 =$

$9 \div 9 =$

$7 \div 7 =$

Solve the following division problems. You have exactly one minute!

$4 \div 2 =$

$16 \div 4 =$

$8 \div 4 =$

$10 \div 10 =$

$6 \div 6 =$

$10 \div 10 =$

$36 \div 6 =$

$3 \div 1 =$

$18 \div 9 =$

$36 \div 6 =$

$9 \div 9 =$

$7 \div 7 =$

Solve the following division problems. You have exactly one minute!

$4 \div 4 =$

$12 \div 12 =$

$50 \div 10 =$

$8 \div 8 =$

$40 \div 10 =$

$48 \div 8 =$

$10 \div 2 =$

$40 \div 10 =$

$9 \div 9 =$

$15 \div 3 =$

$15 \div 5 =$

$16 \div 8 =$

Solve the following division problems. You have exactly one minute!

$4 \div 4 =$

$12 \div 12 =$

$50 \div 10 =$

$8 \div 8 =$

$40 \div 10 =$

$48 \div 8 =$

$10 \div 2 =$

$40 \div 10 =$

$9 \div 9 =$

$15 \div 3 =$

$15 \div 5 =$

$16 \div 8 =$

Solve the following division problems. You have exactly one minute!

$4 \div 4 =$

$12 \div 12 =$

$50 \div 10 =$

$8 \div 8 =$

$40 \div 10 =$

$48 \div 8 =$

$10 \div 2 =$

$40 \div 10 =$


$9 \div 9 =$

$15 \div 3 =$


$15 \div 5 =$

$16 \div 8 =$

1) Shade in $\frac{6}{10}$ of the following square:



2) Shade in $\frac{87}{100}$ of the following square:




Ex) Turn $\frac{2}{10} + \frac{3}{100}$ into a single fraction.

$$\frac{2}{10} + \frac{3}{100} = \frac{2 \cdot 10}{10 \cdot 10} + \frac{3}{100} = \frac{20}{100} + \frac{3}{100} = \boxed{\frac{23}{100}}$$


3) Turn $\frac{5}{10} + \frac{7}{100}$ into a single fraction.

4) Turn $\frac{3}{10} + \frac{4}{100} + \frac{7}{1000}$ into a single fraction.

1) Shade in $\frac{6}{10}$ of the following square:



2) Shade in $\frac{87}{100}$ of the following square:



Ex) Turn $\frac{2}{10} + \frac{3}{100}$ into a single fraction.

$$\frac{2}{10} + \frac{3}{100} = \frac{2 \cdot 10}{10 \cdot 10} + \frac{3}{100} = \frac{20}{100} + \frac{3}{100} = \boxed{\frac{23}{100}}$$

3) Turn $\frac{5}{10} + \frac{7}{100}$ into a single fraction.

4) Turn $\frac{3}{10} + \frac{4}{100} + \frac{7}{1000}$ into a single fraction.

Introduction to Decimals

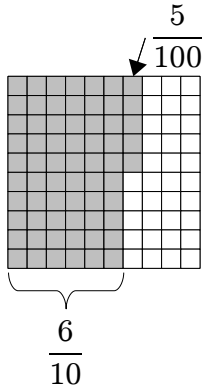
Base-10 Fractions

Base-10 fractions are fractions that have denominators of 10, 100, 1000, and so on.

Ex: $\frac{9}{10}$, $\frac{63}{100}$, $\frac{237}{1000}$, and $\frac{5937}{10000}$ are base-10 fractions.

We can write base-10 fractions as smaller base-10 fractions (that is, in **expanded form**).

Ex: $\frac{65}{100}$ ← # of slices
 ← # of slices in a whole



So, $\frac{65}{100} = \frac{6}{10} + \frac{5}{100}$

Ex: $2\frac{17}{100}$



So, $2\frac{17}{100} = 2 + \frac{1}{10} + \frac{7}{100}$

Extending the Place-Value System

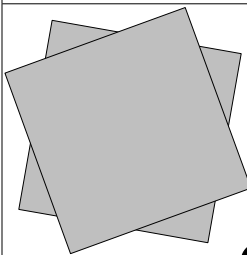


In our number system, we break a “hundred” into 10 pieces, making “tens.” Then, we break a “ten” into 10 pieces, making “ones.” We can keep going by breaking a “one” into 10 pieces, making “tenths.” Going further, we can break a “tenth” into 10 pieces, making “hundredths.”

Hundreds 100's	Tens 10's	Ones 1's	Tenths 1/10's	Hundredths 1/100's

The decimal point separates the whole pieces (ones, tens, hundreds) from the parts (tenths, hundredths).





Ex: Write $2\frac{17}{100}$ as a decimal.

From earlier, we showed that $2\frac{17}{100} = 2 + \frac{1}{10} + \frac{7}{100}$.

Ones 1's	Tenths 1/10's	Hundredths 1/100's
		

So, $2\frac{17}{100} = \boxed{2.17}$.

Ex: Write 2.718 as a base-10 fraction.

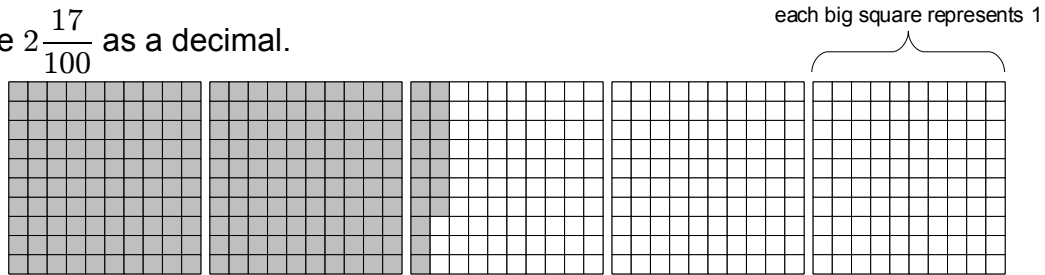
Ones 1's	Tenths 1/10's	Hundredths 1/100's	Thousandths 1/1000's
			

So,

$$2.718 = 2 + \frac{7}{10} + \frac{1}{100} + \frac{8}{1000} = 2\frac{718}{1000}$$

Shade in the following squares to represent each base-10 fraction. Then, write it in expanded form (that is, as smaller base-10 fractions). Afterwards, write the value of each place value, and finally write the fraction as a decimal.

Ex) Write $2\frac{17}{100}$ as a decimal.




Then, $2\frac{17}{100} = 2 + \frac{1}{10} + \frac{7}{100}$

Hundreds 100's	Tens 10's	Ones 1's	Tenths 1/10's	Hundredths 1/100's	Thousandths 1/1000's
		2	1	7	

So, $2\frac{17}{100} = \boxed{2.17}$

1) Write $\frac{53}{100}$ as a decimal.




Then, $\frac{53}{100} =$

Hundreds 100's	Tens 10's	Ones 1's	Tenths 1/10's	Hundredths 1/100's	Thousandths 1/1000's

So, $\frac{53}{100} =$

2) Write $4\frac{87}{100}$ as a decimal.




Then, $4\frac{87}{100} =$

Hundreds 100's	Tens 10's	Ones 1's	Tenths 1/10's	Hundredths 1/100's	Thousandths 1/1000's

So, $4\frac{87}{100} =$

3) Write $1\frac{7}{10}$ as a decimal.




Then, $1\frac{7}{10} =$

Hundreds 100's	Tens 10's	Ones 1's	Tenths 1/10's	Hundredths 1/100's	Thousandths 1/1000's

So, $1\frac{7}{10} =$

4) Write $3\frac{7}{100}$ as a decimal.



Then, $3\frac{7}{100} =$

Hundreds 100's	Tens 10's	Ones 1's	Tenths 1/10's	Hundredths 1/100's	Thousandths 1/1000's

So, $3\frac{7}{100} =$

Write the following fractions in expanded form. Then, write the value of each place value, and finally write the fraction as a decimal.

Ex) Write $123\frac{45}{100}$ as a decimal.

Expanded form: $123\frac{45}{100} = 100 + 20 + 3 + \frac{4}{10} + \frac{5}{100}$

Hundreds 100's	Tens 10's	Ones 1's	Tenths 1/10's	Hundredths 1/100's	Thousandths 1/1000's
1	2	3	4	5	

So, $123\frac{45}{100} = \boxed{123.45}$

5) Write $567\frac{89}{100}$ as a decimal.

Expanded form: $567\frac{89}{100} =$

Hundreds 100's	Tens 10's	Ones 1's	Tenths 1/10's	Hundredths 1/100's	Thousandths 1/1000's

So, $567\frac{89}{100} =$

6) Write $102\frac{7}{10}$ as a decimal.

Expanded form: $102\frac{7}{10} =$

Hundreds 100's	Tens 10's	Ones 1's	Tenths 1/10's	Hundredths 1/100's	Thousandths 1/1000's

So, $102\frac{7}{10} =$

7) Write $379\frac{502}{1000}$ as a decimal.

Expanded form: $379\frac{502}{1000} =$

Hundreds 100's	Tens 10's	Ones 1's	Tenths 1/10's	Hundredths 1/100's	Thousandths 1/1000's

So, $379\frac{502}{1000} =$

For each decimal, write the value of each place value. Then, write the fraction in expanded form, and finally as a base-10 fraction.

Ex) Write 2.718 as a base-10 fraction.

Hundreds 100's	Tens 10's	Ones 1's	Tenths 1/10's	Hundredths 1/100's	Thousandths 1/1000's
		2	7	1	8

So,

$$2.718 = 2 + \frac{7}{10} + \frac{1}{100} + \frac{8}{1000} = 2\frac{718}{1000}$$

8) Write 1.414 as a base-10 fraction.

Hundreds 100's	Tens 10's	Ones 1's	Tenths 1/10's	Hundredths 1/100's	Thousandths 1/1000's

So,

$$1.414 =$$

9) Write 314.159 as a base-10 fraction.

Hundreds 100's	Tens 10's	Ones 1's	Tenths 1/10's	Hundredths 1/100's	Thousandths 1/1000's

So,

$$314.159 =$$

10) Write 9.807 as a base-10 fraction.

Hundreds 100's	Tens 10's	Ones 1's	Tenths 1/10's	Hundredths 1/100's	Thousandths 1/1000's

So,

$$9.807 =$$

11) Write 0.23 as a base-10 fraction.

Hundreds 100's	Tens 10's	Ones 1's	Tenths 1/10's	Hundredths 1/100's	Thousandths 1/1000's

So,

$$0.23 =$$